

BÜTÜN - YARIM

Bir varlığın parçalara ayrılmamış ,eksiksiz haline bütün denir .



Bütün karpuz



Bütün ekmek



Bütün elma

Bir bütünün iki eş parçasından her birine yarım denir .



Yarım limon



Yarım simit



Yarım portakal

Altın Bilgi 1° : Bir bütün içinde iki tane yarım vardır.



Bütün karpuz



Yarım karpuz



Yarım karpuz

Bir bütün iki yarım eder .



Bütün limon



Yarım limon



Yarım limon

Bir bütün iki yarım eder .


Altın Bilgi 2° : İki yarım dan bir bütün elde edilir.



Yarım elma



Yarım elma



Bütün elma

İki yarım bir bütün eder .



Yarım simit



Yarım simit




Bütün simit

İki yarım bir bütün eder .



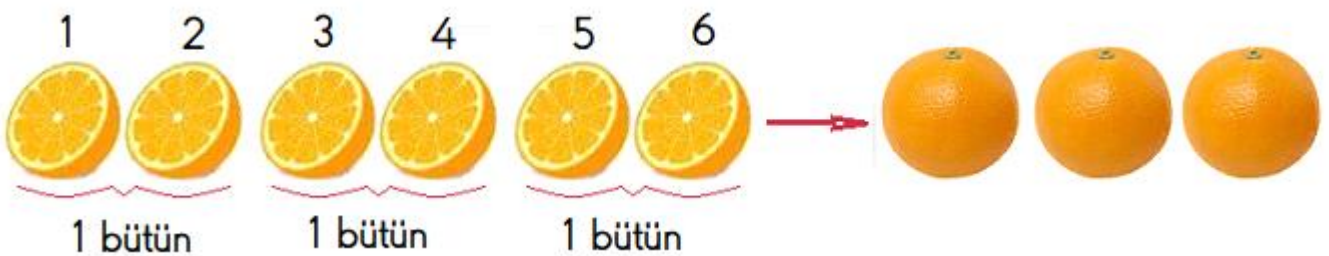
Örnek 1° : 2 bütün kaç yarım eder ?



2 bütün , 4 yarım eder .



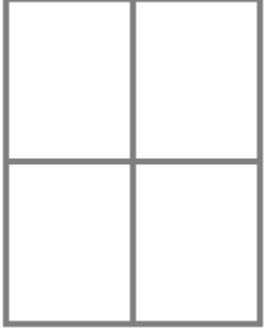
Örnek 2° : 6 yarım kaç bütün eder ?



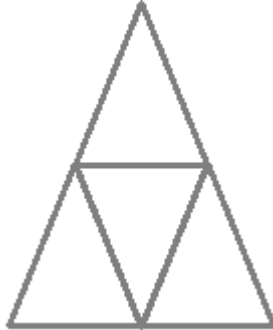
ETKİNLİK - 1

Aşağıdaki şekillerin yarısını boyayınız.

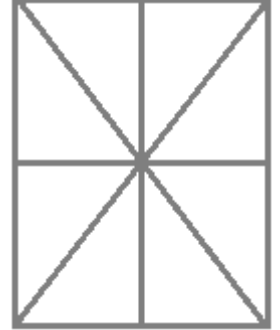
*



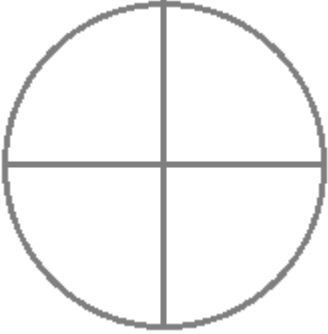
*



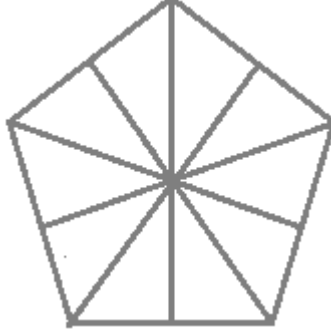
*



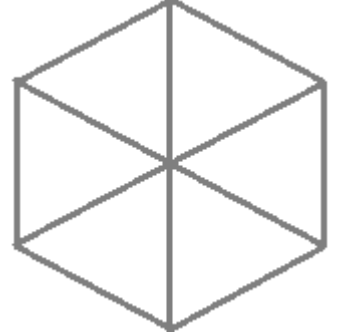
*




*



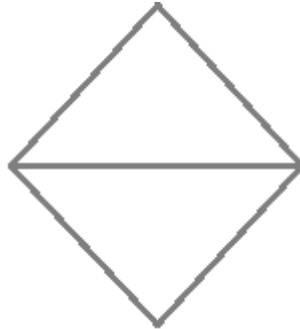
*



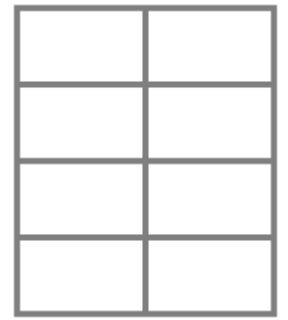
*



*



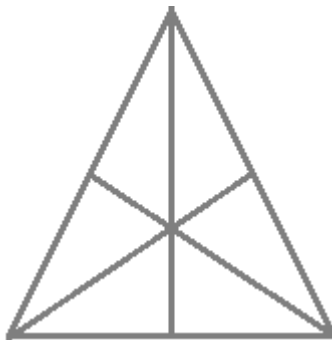
*



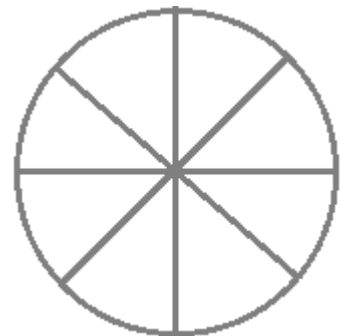
*



*




*




ETKİNLİK - 2


Aşağıda verilen varlıkların kaç tane olduğunu yazınız.




..... bütün ekmek



..... yarım elma




..... bütün elma




..... yarım limon



..... bütün karpuz



..... yarım kavun



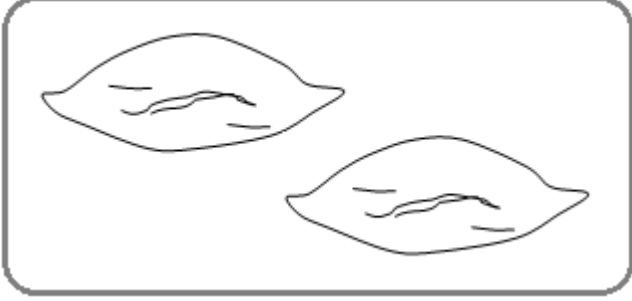
..... bütün portakal



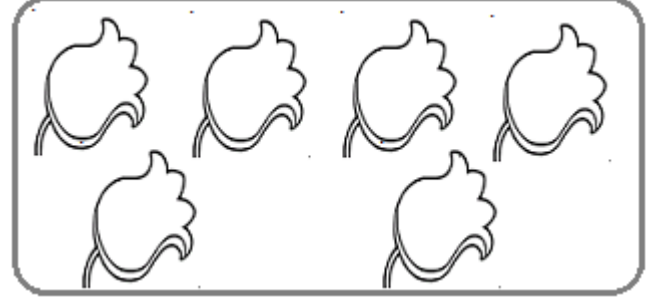
..... yarım simit

ETKİNLİK - 3

Aşağıda verilen nesnelerin , yarısı kadarını boyayarak yarısının kaç tane olduğunu altına yazınız.




Yarısı ekmek




Yarısı çiçek



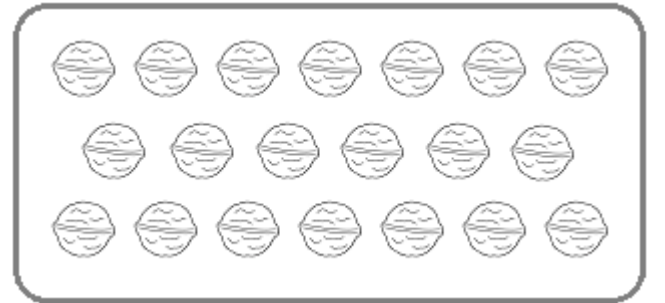
Yarısı mum



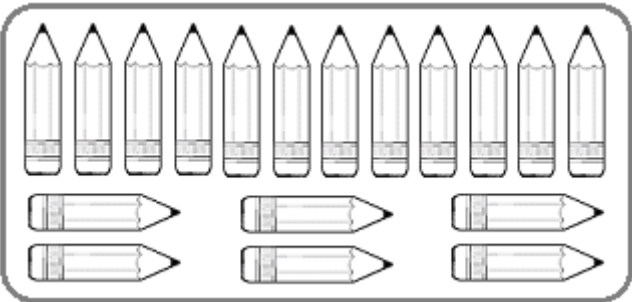
Yarısı civciv




Yarısı elma



Yarısı ceviz



Yarısı kalem



Yarısı kelebek